



Transport Malta

# TRAFFIC RULES

Answer the questions below and complete the number grid

<input type="checkbox"/>	<input type="checkbox"/>	<input type="checkbox"/>	<input type="checkbox"/>
<input type="checkbox"/>	<input type="checkbox"/>	<input type="checkbox"/>	<input type="checkbox"/>
<input type="checkbox"/>	<input type="checkbox"/>	<input type="checkbox"/>	<input type="checkbox"/>
<input type="checkbox"/>	<input type="checkbox"/>	<input type="checkbox"/>	<input type="checkbox"/>
<input type="checkbox"/>	<input type="checkbox"/>	<input type="checkbox"/>	<input type="checkbox"/>
<input type="checkbox"/>	<input type="checkbox"/>	<input type="checkbox"/>	<input type="checkbox"/>

How many persons suffered injuries due to traffic accidents in the year 2010 ? \_\_\_\_\_

What is the NATIONAL SPEED LIMIT on the roads in Malta and Gozo ? \_\_\_\_\_ km/h

What is the number of recorded road accidents for the year 2010 ? \_\_\_\_\_

How many persons died in car accidents in the year 2010 ? \_\_\_\_\_

What is the number of recorded road accidents for the year 2010 ? \_\_\_\_\_

What is the minimum footway width as per LN 364 of 2003 ? \_\_\_\_\_ mm

Vehicles cannot be parked within \_\_\_\_\_ cm on each side of a bus stop.

What is the maximum speed in towns for minibuses ? \_\_\_\_\_ km/h

What is the maximum speed in towns for private cars ? \_\_\_\_\_ km/h

If a vehicle is travelling at 80km/h, how far does it travel in 3 seconds ? \_\_\_\_\_ m

If a vehicle is travelling at 50km/h, how far does it travel in 3 seconds ? \_\_\_\_\_ m

**Useful Links:**


<http://www.dft.gov.uk/ha/standards/dmr/vol7/section2/hd3901.pdf>


[http://www.nso.gov.mt/statdoc/document\\_file.aspx?id=2948](http://www.nso.gov.mt/statdoc/document_file.aspx?id=2948)


<http://schoolnet.gov.mt/healthandsafety/Documents/hslaws/others/ln65.11.pdf>

# TRAFFIC SIGNS

Complete the Sign Descriptions and FIND THE WORDS in the Grid


 No \_\_\_\_\_

 No \_\_\_\_\_


 No \_\_\_\_\_

 Road \_\_\_\_\_


 No \_\_\_\_\_

 \_\_\_\_\_ Sign

 \_\_\_\_\_ Sign

 \_\_\_\_\_ Speed Limit

 \_\_\_\_\_ Blackspot



Useful Link:




<http://www.doi.gov.mt/en/archive/HighwaycodeEng/index.asp>



Transport Malta

# SAFETY NEAR WATER

## MATCH THE PICTURES



**DIAL 112  
for HELP**



Transport Malta


# SAFETY NEAR WATER

## FILL IN THE CORRECT WORDS

If you see someone in d \_ \_ f \_ \_ \_ \_ \_



in the water, DO NOT put yourself in

\_ \_ \_ g \_ \_  . \_ \_ a \_ **112** for help.

Never jump into the water. If it is safe to help,

lie face down and reach out with a stick or a

\_ \_ \_ \_ f  . You can throw a \_ \_ p \_



and pull the person in. You can throw him

something that floats like a \_ \_ \_ \_  or


a \_ \_ f \_ b \_ \_ \_  . When the person has

been rescued, keep him w



and

wait for the a \_ \_ \_ \_ \_ \_ \_ \_





Transport Malta

# SAFER CYCLING

## Complete the Descriptions and FIT THE WORDS in the Grid



I intend to  
Down



High  
Clothing



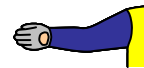
Cycle  
-----



Bicycle  
-----



Cycling  
-----



I intend to  
Turn -----




NO  
-----



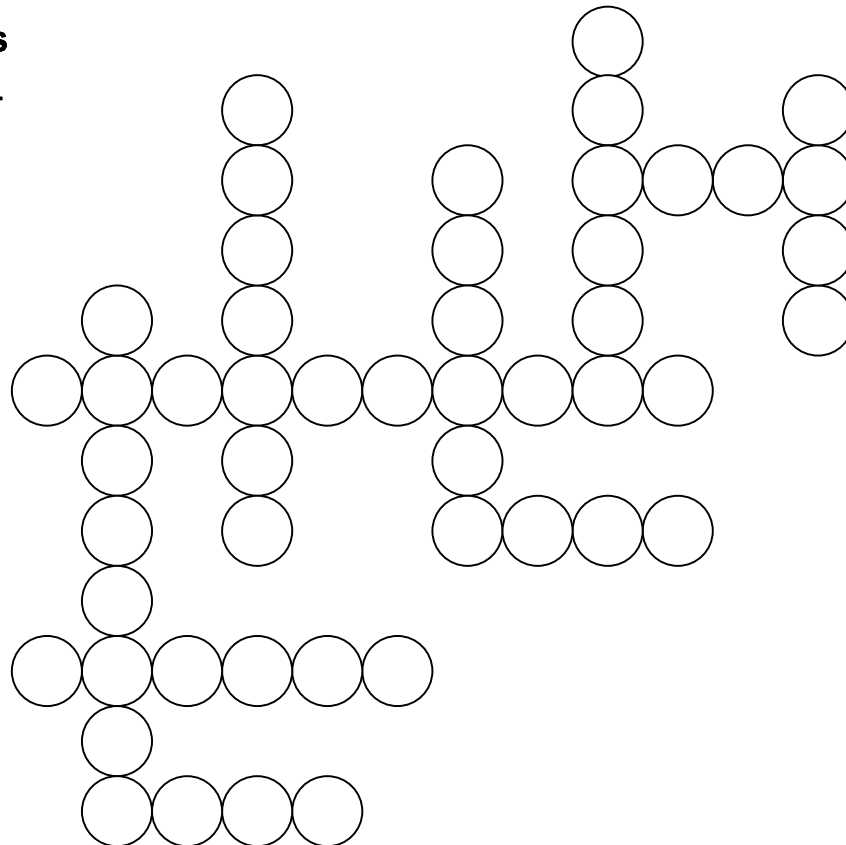
Route for  
Pedal  
-----



Cycling  
-----



RED  
means  
-----



Useful Link:

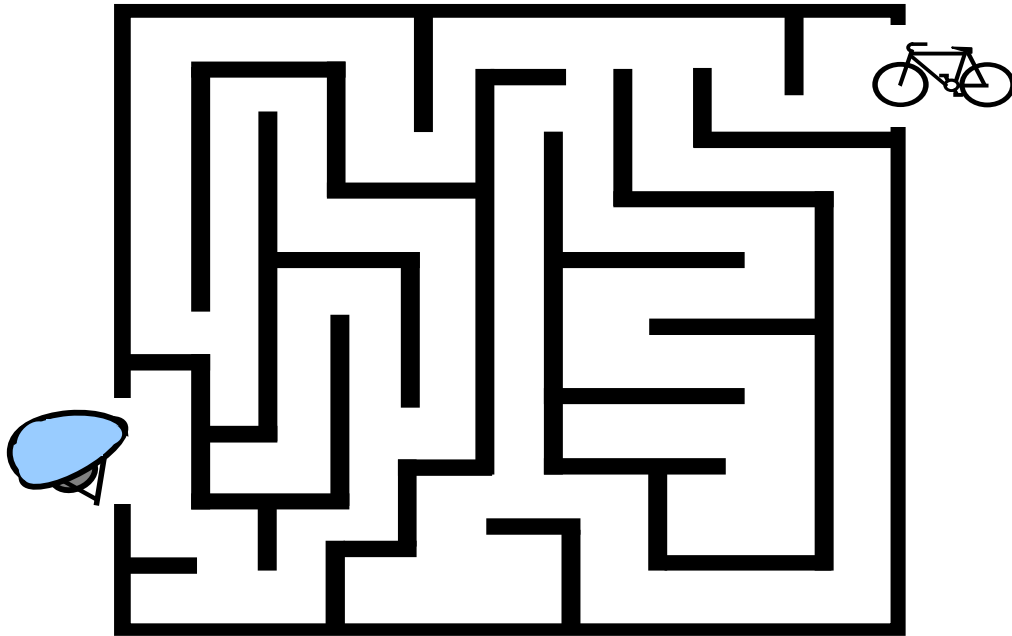
<http://www.doi.gov.mt/en/archive/HighwaycodeEng/index.asp>



Transport Malta

# SAFETY ON THE ROAD

## FIND THE TRAIL & JOIN THE DOTS



ALWAYS WEAR YOUR CYCLE HELMET WHEN RIDING YOUR BICYCLE



ALWAYS WEAR YOUR SEATBELT IN THE CAR

# SAFETY ON THE ROAD

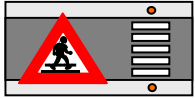
## COLOUR THE PICTURE



Carry your toys in a bag and do not play with them on the street whilst walking

# WALK SAFELY

Complete the Descriptions and FIND THE WORDS in the Grid



ZEBRA  
\_ R \_ S \_ \_ \_ G




You MAY  
C \_ \_ S \_  
the Road



Segregated  
\_ Y \_ \_ E &  
Pedestrian  
Lane




NO  
\_ \_ D \_ \_ T \_ \_ A \_ \_



DO \_ \_ \_  
Cross the Road



Pedestrian  
F \_ \_ T \_ \_ \_ H



Useful Link:

<http://www.doi.gov.mt/en/archive/HighwaycodeEng/index.asp>





Transport Malta

# TRAFFIC SIGNS

## SOLVE THE JUMBLED WORDS



SONTOUUCN THEIW NILE  
C \_ \_ T \_ \_ U \_ \_ \_ \_ H \_ \_ \_ \_ I \_ \_ \_



TOANOURBDU  
\_ \_ \_ U \_ \_ \_ A \_ \_ \_ \_ T




EVIG AWY  
\_ \_ \_ V \_ \_ \_ \_ A \_ \_



AINLAONT EDPEES IMILT  
\_ \_ \_ T \_ \_ \_ \_ L S \_ E \_ \_ \_ M \_ \_ \_



ON HG TIR UTNR  
\_ \_ \_ \_ \_ G \_ \_ \_ \_ U \_ \_ \_



ROIRTIPY EVOR IGSNORSC FFAIRCT  
P \_ O \_ \_ \_ \_ V \_ C \_ S \_ \_ \_ \_ F \_ \_ \_



ON KTEORVAGNI  
\_ \_ \_ O \_ \_ \_ R \_ \_ \_ K \_ \_ \_ \_




EIHTGH MILIT  
\_ \_ \_ I \_ \_ \_ \_ \_ I \_ \_ \_ T

Useful Link:

<http://www.doi.gov.mt/en/archive/HighwaycodeEng/indes.asp>

# TRAFFIC SIGNS

## FIND THE SIGN



Join the NO BICYCLES and the GIVE WAY signs  
and find the hidden sign



Useful Link:

<http://www.doi.gov.mt/en/archive/HighwaycodeEng/index.asp>